

SEAT NO. 44

SUPERVISOR'S SIGN : _____

**UNIVERSITY OF MUMBAI'S
GARWARE INSTITUTE OF CAREER EDUCATION & DEVELOPMENT
P.G.DIPLOMA IN CUSTOMS CLEARANCE & FREIGHT FORWARDING
(PGDCC&FF)
ENTRANCE EXAMINATION**

DATE : 23-JUL-17

TIME : 11.00 AM TO 12.00 NOON

MARKS : 50

- NOTE:**
- DO NOT CARRY MOBILE IN THE EXAMINATION HALL.
 - PUT A TICK (✓) ON THE CORRECT ANSWER OPTION ON THE GRID PAPER.
 - RETURN GRID PAPER & QUESTION PAPER SEPARATELY
 - NO OVERWRITING IS ALLOWED
 - EACH QUESTION CARRIES ONE MARK

Language:

Read each sentence to find out whether there is any grammatical error in it. The error, if any will be in one part of the sentence. The letter of that part is the answer. If there is no error, the answer is 'D'. (Ignore the errors of punctuation, if any)

1. (solve as per the direction given above)
 - (a) We discussed about the problem so thoroughly
 - (b) on the eve of the examination
 - (c) that I found it very easy to work it out.
 - (d) No error.

2. (Solve as per the direction given above)
 - (a) An Indian ship
 - (b) laden with merchandise
 - (c) got drowned in the Pacific Ocean
 - (d) No error.

In the following questions choose the word which is the exact OPPOSITE of the given words.

3. QUIESCENT
(a) Active (b) Dormant (c) Weak (d) Unconcerned

4. FRADULENT
(a) Candid (b) Direct (c) Forthright (d) Genuine

Pick out the most effective word(s) from the given words to fill in the blank to make the sentence meaningfully complete.

5. Success in this examination depends _____ hard work alone.
(a) at (b) over (c) for (d) on

6. If you smuggle goods into the country, they may be _____ by the customs authority.
(a) Possessed (b) punished (c) confiscated (d) fined

In each question below, there is a sentence of which some parts have been jumbled up. Rearrange these parts which are labelled P, Q, R and S to produce the correct sentence. Choose the proper sequence.

7. Then

P: it struck me

Q: of course

R: suitable it was

S: how eminently

The proper sequence should be:

- (a) SPQR (b) QSRP (c) PSRQ (d) QPSR

8. Education is

P: of the proper sense of responsibilities

Q: the first need

R: in a citizen

S: for the development

The proper sequence should be:

- (a) SQPR (b) QSRP (c) QSPR (d) PQRS

In the following the questions choose the word which best expresses the meaning of the given word.

9. VENT

- (a) Opening (b) Stodge (c) End (d) Past tense to go

10. AUGUST

- (a) Common (b) Ridiculous (c) Dignified (d) Petty

Aptitude:

11. A grocer has a sale of Rs. 6435, Rs. 6927, Rs. 6855, Rs. 7230 and Rs. 6562 for 5 consecutive months. How much sale must he have in the sixth month so that he gets an average sale of Rs. 6500?

- (a) Rs.4991 (b) Rs.5991 (c) Rs. 6001 (d) Rs.6991

12. A pupil's marks were wrongly entered as 83 instead of 63. Due to that the average marks for the class got increased by half ($1/2$). The number of pupils in the class is:

- (a) 10 (b) 20 (c) 40 (d) 73

13. How many bricks, each measuring 25 cm x 11.25 cm x 6 cm, will be needed to build a wall of 8 m x 6 m x 22.5 cm?

- (a) 5600 (b) 6000 (c) 6400 (d) 7200

14. A hall is 15 m long and 12 m broad. If the sum of the areas of the floor and the ceiling is equal to the sum of the areas of four walls, the volume of the hall is:

- (a) 720 (b) 900 (c) 1200 (d) 1800

15. 331, 482, 551, 263, 383, 362, 284 (Find the odd man out)

- (a) 263 (b) 383 (c) 331 (d) 551

6435
6927
6855
7230
6562

16. 835, 734, 642, 751, 853, 981, 532 (Find the odd man out)

- (a) 751 (b) 853 (c) 981 (d) 532

17. What least number must be added to 1056, so that the sum is completely divisible by 23?

- (a) 2 (b) 3 (c) 18 (d) 21

18. If the number $517 * 324$ is completely divisible by 3, then the smallest whole number in the place of * will be:

- (a) 0 (b) 1 (c) 2 (d) none of these

19. There are two examinations rooms A and B. If 10 students are sent from A to B, then the number of students in each room is the same. If 20 candidates are sent from B to A, then the number of students in A is double the number of students in B. The number of students in room A is:

- (a) 20 (b) 80 (c) 100 (d) 200

20.

$$\frac{(469 + 174)^2 - (469 - 174)^2}{(469 \times 174)} = ?$$

- (a) 2 (b) 4 (c) 295 (d) 643

Logical:

21. Look at this series: 22, 21, 23, 22, 24, 23, ... What number should come next?

- (a) 22 (b) 24 (c) 25 (d) 26

22. Look at this series: 201, 202, 204, 207, ... What number should come next?

- (a) 205 (b) 208 (c) 210 (d) 211

In these series, you will be looking at both the letter pattern and the number pattern. Fill the blank in the middle of the series or end of the series.

23. B_2CD , _____, BCD_4 , B_5CD , BC_6D

- (a) B_2C_2D (b) BC_3D (c) B_2C_3D (d) BCD_7

24. QAR, RAS, SAT, TAU, _____

- (a) UAV (b) UAT (c) TAS (d) TAT

Each problem consists of three statements. Based on the first two statements, the third statement may be true, false, or uncertain.

25. Blueberries cost more than strawberries.
Blueberries cost less than raspberries.
Raspberries cost more than strawberries and blueberries.
If the first two statements are true, the third statement is
(a) True (b) False (c) Uncertain
26. Class A has a higher enrollment than Class B.
Class C has a lower enrollment than Class B.
Class A has a lower enrollment than Class C.
If the first two statements are true, the third statement is
(a) True (b) False (c) Uncertain

Each question has an underlined word followed by four answer choices. You will choose the word that is a necessary part of the underlined word.

27. language

- (a) tongue (b) slang (c) writing (d) words

28. monopoly

- (a) corrupt (b) exclusive (c) rich (d) gigantic

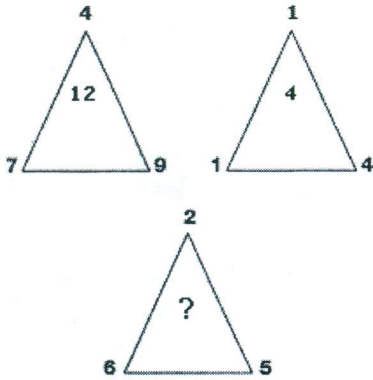
Read each definition and all four choices carefully, and find the answer that provides the best example of the given definition.

29. A **Guarantee** is a promise or assurance that attests to the quality of a product that is either (1) given in writing by the manufacturer or (2) given verbally by the person selling the product. Which situation below is the best example of a Guarantee?
(a) Meera purchases a DVD player with the highest consumer ratings in its category.
(b) The salesperson advises Kapil to be sure that he buys an air conditioner with a guarantee.
(c) The local auto body shop specializes in refurbishing and selling used cars.
(d) Laxmi buys a used digital camera from her coworker who says that she will refund Laxmi's money if the camera's performance is not of the highest quality.
30. **Establishing a Power of Attorney** occurs when a legal document is created that gives one individual the authority to act for another. Which situation below is the best example of Establishing a Power of Attorney?
(a) Leena is selling her house and she hires a lawyer to review the contract.
(b) Seema's mother can no longer get to the bank to cash her checks and make deposits, so she has taken legal steps to enable Seema to do these things for her.
(c) Jai's father is elderly and Jai thinks he is no longer able to make decisions for himself.
(d) At her daughter's urging, Mrs. Rao opens up a retirement account with the local bank.

Puzzles:

31.

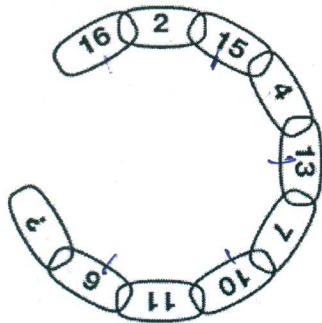
Which number replaces the question mark?



- (a) 12 (b) 9 (c) 4 (d) 5

32.


Which number replaces the question mark?



- (a) 16 (b) 7 (c) 4 (d) 15

33.

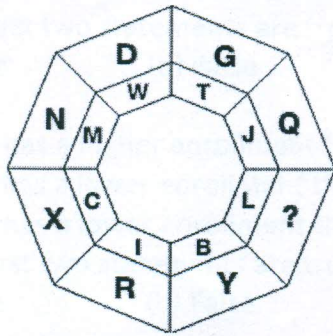
Which letter replaces the question mark?



- (a) O (b) D (c) H (d) M

34.




Which letter replaces the question mark?



- (a) O (b) G (c) I (d) X

35.



What is missing in the last grid?



- A B C D E F

36.

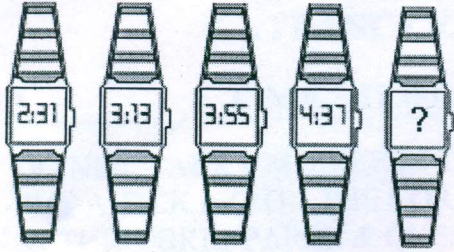
Which grid replaces the question mark?



- A B C D E F

37.

What time should the last watch show?



(a) 5:39

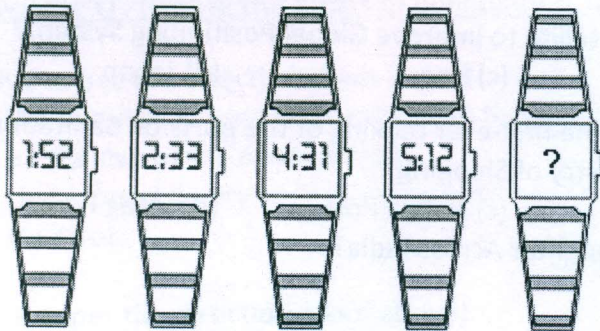
(b) 5:29

(c) 5:19

(d) 5:49

38.

What time should the last watch show?



(a) 6:10


(b) 6:30

(c) 6:40

(d) 6:20

39.

Which letter replaces the question mark?



(a) A

(b) T

(c) C

(d) D

40.

Which letter replaces the question mark?



- (a) P (b) Q (c) M (d) L

Current Affairs:

41. Which of the following country placed in top five consumer markets in Asia?
(a) India (b) Israel (c) Syria (d) Japan
42. Which country launched a new satellite to improve Global Positioning System?
(a) Russia (b) Spain (c) Iraq (d) Japan
43. Which port has topped the list in the first-ever ranking of the ports on Sanitation Parameters under the Union Ministry of Shipping?
(a) Kandla Port (b) Cochin Port (c) Haldia Port (d) Vizag Port
44. Which ministry bans the cattle slaughter Across India?
(a) Ministry of Environment
(b) Ministry of Civil Aviation
(c) Ministry of Human Resource Development
(d) Ministry of Agriculture and Farmer welfare
45. Which country imposed an anti-dumping duty on a Chinese chemical pharma industry to protect domestic industry?
(a) India (b) Britain (c) Algeria (d) Fiji
46. Who has been appointed Director General of Goods and Services Tax Intelligence?
(a) Rajesh Singh (b) John Joseph (c) Rahul Verma (d) Venkat Prabhu
47. Who launched the "GST Rates Finder" mobile app to verify the accurate tax rates on commodity and services recently?
(a) Urijit Patel (b) Narendra Modi (c) Arun Jaitley (d) Pranab Mukherjee
48. Who has become the first woman cricketer to score 6000 runs in women's ODI cricket?
(a) Vellaswamy Vanitha (b) Jhulan Goswami (c) Mithali Raj (d) Thirush Kamini
49. Who is appointed as the new coach of the Indian cricket team?
(a) Ravi Shastri (b) Rishi Dhawan (c) Anil Kumble (d) Kapil Dev
50. Who is selected as the next President of India?
(a) Ram Nath Kovind (b) Suresh Kumar (c) Rajesh Kumar (d) Meira Kumar

SEAT NO. : _____

SUPERVISOR'S SIGN.: _____

**UNIVERSITY OF MUMBAI'S
GARWARE INSTITUTE OF CAREER EDUCATION & DEVELOPMENT
P.G. DIPLOMA IN LOGISTICS & SUPPLY CHAIN MANGEMENT
(PGDCCFF)
ENTRANCE EXAM**

DATE: 24-JUL-16

TIME : 11.00AM TO 12.00 NOON

MARKS : 50

NOTE: PUT A TICK (✓) ON THE CORRECT ANSWER OPTION ON THE GRID PAPER & RETURN GRID PAPER.

I. English Language:

1. Juan _____ in the library this morning.

a. is study	b. studying
c. is studying	d. are studying

2. Each of the Olympic athletes _____ for months, even years.

a. have been training	b. were training
c. has been training	d. been training

3. Alicia, _____ the windows please. It's too hot in here.

a. opens	b. open
c. opened	d. will open

4. Mr. Hawkins requests that someone _____ the data by fax immediately.

a. sent	b. sends
c. send	d. to send

5. Who is _____, Marina or Sachiko?

a. tallest	b. tall
c. taller	d. the tallest

II Quantitative Aptitude:

6. A bag contains 50P, 25P and 10P coins in the ratio of 5:9:4, amounting to Rs.206. Find the number of coins of each type respectively.

a. 360, 160, 200	b. 160, 360, 200
c. 200, 360, 160	d. 200, 160, 300

7. If each side of a square is increased by 25%, find the percentage change in its area?

a. 65.25	b. 56.25
c. 65	d. 56

8. In an election between two candidates, one got 55% of the total valid votes, 20% of the votes were invalid. If the total number of votes was 7500, the number of valid votes that the other candidate got was:

a. 2500	b. 2700
c. 2900	d. 3100

9. Fresh fruit contains 68% water and dry fruit contains 20% water. How much dry fruit can be obtained from 100kg of fresh fruits?

a. 20	b. 30
c. 40	d. 50

10. In an examination, a student scores 4 marks for every correct answer and loses 1 mark for every wrong answer. If he attempts all 60 questions and secures 130 marks, the number of questions he attempts correctly is:

a. 35	b. 38
c. 40	d. 42

III General Knowledge:

11. Indian Constitution has been divided under _____.

a. 10 parts	b. 20 parts
c. 24 parts	d. 6 parts

12. The Election Commissioner can be removed by _____

a. Prime Minister	b. Home Minister
c. The President	d. The Parliament

13. Which crop is sown on the largest area in India?

a. Maize	b. Wheat
c. Sugarcane	d. Rice

14. Diamond cutting is undertaken as a cottage industry in?

a. Rajasthan	b. Gujarat
c. Andhra	d. Maharashtra

15. The New Symbol of Indian Rupee is a blend of?

a. Devanagari Ra	b. Latin Capital R
c. Devanagari Ra and Latin Capital R	d. None of these.

16. India is the leading exporter of:

a. Tea	b. Mica
c. Manganese	d. Jute

17. Finance Commission is constituted every

a. Two years	b. Three years
c. Five years	d. Six years

18. Which one of the following is a method for an exporter to get a contract?

a. Proforma invoice	b. Purchase order
c. Sales contract	d. All of the above.

19. Which of the following is not a basic objective of documentation in foreign trade?

a. To assure that the exporter will receive the payment	b. To assure that the importer will receive the goods
c. To eliminate risk of non completion	d. None of the above.


20. Who is the new Prime Minister of United Kingdom (UK)?

a. Theresa Donovan	b. Theresa Miller
c. Theresa May	d. Theresa Makone

IV Puzzles:

21.

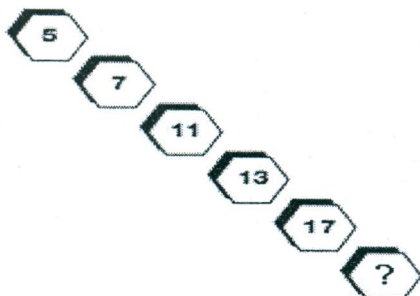
What number comes inside the circle?



a. 6	b. 8
c. 4	d. 2

22.


Which number completes the puzzle?



a. 21	b. 19
c. 23	d. 25

23.


Which letter replaces the question mark?



a. H	b. O
c. K	d. M

24.

Which number replaces the question mark?



a. 6	b. 8
c. 2	d. 4

25.

Which number replaces the question mark?

6	FKM	24
12	LUC	24
20	IRB	9
4	DGQ	24
34	PJH	?

a. 22	b. 14
c. 0	d. 8

V Subject Knowledge (Basic):

26. Under which of the following Export Promotion Schemes, Capital Goods are allowed to be imported duty free?

a. Export Promotion Capital Goods Scheme	b. Export Oriented Unit Scheme
c. Special Economic Zone Scheme	d. All of the above

27. All revenues received by Government by way of taxation like income-tax, central excise, custom, land revenue (tax revenues) etc., form the –

a. Government of India	b. Contingency Fund of India
c. Consolidated Fund of India	d. All of these

28. Who is the signatory on the Indian currency notes in denomination of two rupees and above?

a. Secretary, RBI	b. Finance Secretary, Minister of Finance
c. Governor, RBI	d. Finance Minister,

	Ministry of Finance.
--	----------------------

29. The General Budget is presented in the parliament normally in the month of

a. January	b. February
c. March	d. Last month of the year.

30. Which of the following deals with economic offences?

a. MISA	b. NSA
c. TADA	d. COFEPOSA

31. Which of the following taxes is a progressive tax?

a. income tax	b. custom duty
c. sales tax	d. excise duty

32. In Indian economy, the principal means of transportation is-

a. airways	b. railways
c. waterways	d. roadways

33. Who is known as the Father of White Revolution?

a. V Kurien	b. MS Swaminathan
c. JP Narayan	d. Baba Amte

34. The Goods and Service Tax (GST) proposed to be introduced covers taxes like-

a. Trade I Sales Tax	b. Service tax
c. Service, Excise	d. Excise, Service, VAT

35. International Date Line passes through which of the following?

a. Atlantic Ocean	b. Black Sea
c. Mediterranean Sea	d. Pacific Ocean

VI Miscellaneous:

36. Find the odd man out: 1, 3, 9, 12, 19, 29

a. 12	b. 9
c. 1	d. 3

37. Find the odd man out: 742, 743, 633, 853, 871, 990, 532

a. 532	b. 990
c. 633	d. 742

38. A clock is started at noon. By 10 minutes past 5, the hour hand has turned through

a. 155°	b. 145°
c. 152°	d. 140°

39. How many times in a day, are the hands of a clock in straight line but opposite in direction?

a. 48	b. 22
-------	-------

40.

c. 24	d. 12
-------	-------

 $563124555 - ? = 232323$

a. 562892232	b. 562892222
c. 562892212	d. 562892202

41. In a division sum, the divisor is 10 times the quotient and 5 times the remainder. If the remainder is 46, find out the dividend.

a. 4426	b. 3426
c. 4336	d. 5336

42. Synonym of ABANDON

a. try	b. join
c. keep with	d. forsake

43. Synonym of ALTRUISTIC

a. progressive	b. selfish
c. benevolent	d. inhumane

44. Antonym of CANDID

a. bluff	b. devious
c. equal	d. blunt

45. Antonym of BELLYACHE

a. fuss	b. groan
c. appreciate	d. whine

46. The only true education comes through the stimulation of the child's power by the demands of the social situations in which he finds himself. Through these demands he is stimulated to act as a member of a unity, to emerge from his original narrowness of action and feeling, and to conceive himself from the standpoint of the welfare of the group to which he belongs.

The passage best supports the statement that real education.

a. will take place if the children imbibe action and feeling.
b. will take place if the children are physically strong.
c. is not provided in our schools today.
d. comes through the interaction with social situations

47. In a certain code, SIKKIM is written as THLJL, how is TRAINING written in that code ?

a. SQBHOHOF	b. UQBHOIOF
c. UQBHOHOI	d. UQBHOHOF

48. In a certain code, TRIPPLE is written as SQHOOKD. How is DISPOSE written in that code ?

a. EJTQPTF	b. EJTQPTG
c. CHRPNRD	d. CHRONRD

49. Complete the series 1,6,13,22,33,...

a. 46	b. 48
c. 49	d. 41

50. 19, 2, 38, 3, 114, 4, ? . Which term should replace the question mark in this series ?

a. 340	b. 380
c. 456	d. 486
